


Name: _____





1. Finde möglichst schlau **verschiedene** Wege zur **20** zu springen.


Springe in gleich großen Sprüngen!


Rechenaufgabe











Name: _____



1. Finde möglichst schlau **verschiedene** Wege zur _____ zu springen.

Springe in gleich großen Sprüngen!

Rechenaufgabe

_____	+	_____
	—	_____
_____	+	_____
	—	_____
_____	+	_____
	—	_____
_____	+	_____
	—	_____
_____	+	_____
	—	_____